

22/5/18

Electrical Network Analysis & Synthesis

Q.P. Code : 24697

MAY-18

[Time: Three Hours]

18

[Marks: 80]

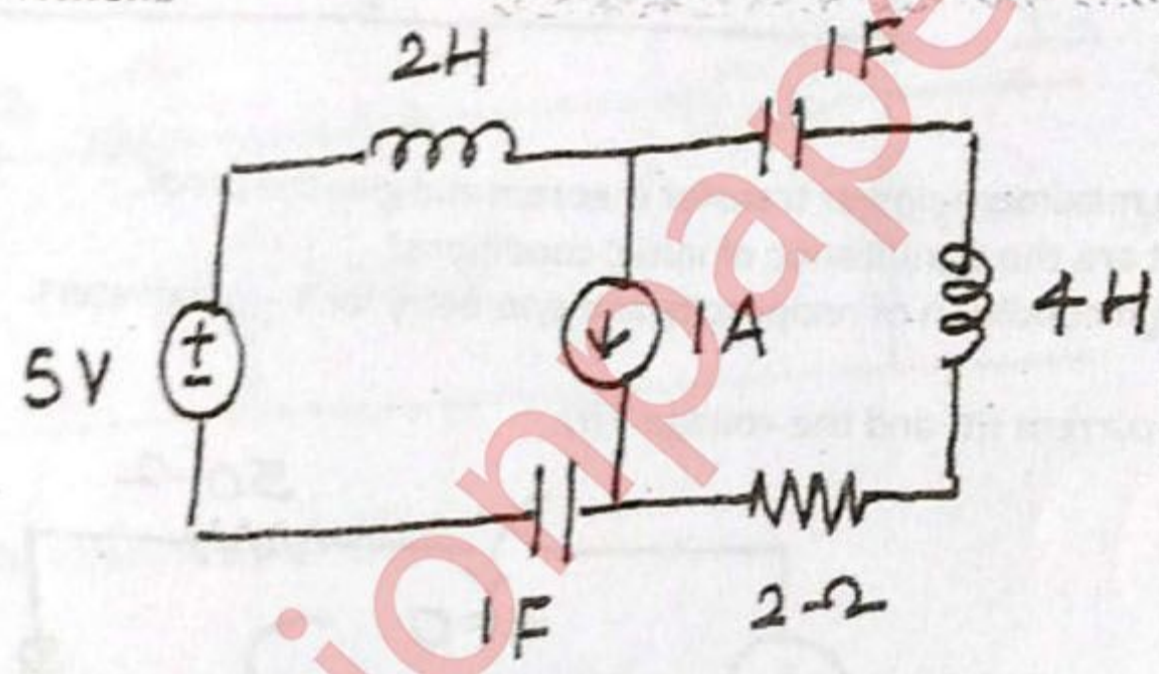
Please check whether you have got the right question paper.

- N.B:
1. Question.No.1 is compulsory.
 2. Attempt any THREE questions out of remaining FIVE questions.
 3. Assume suitable data if necessary.

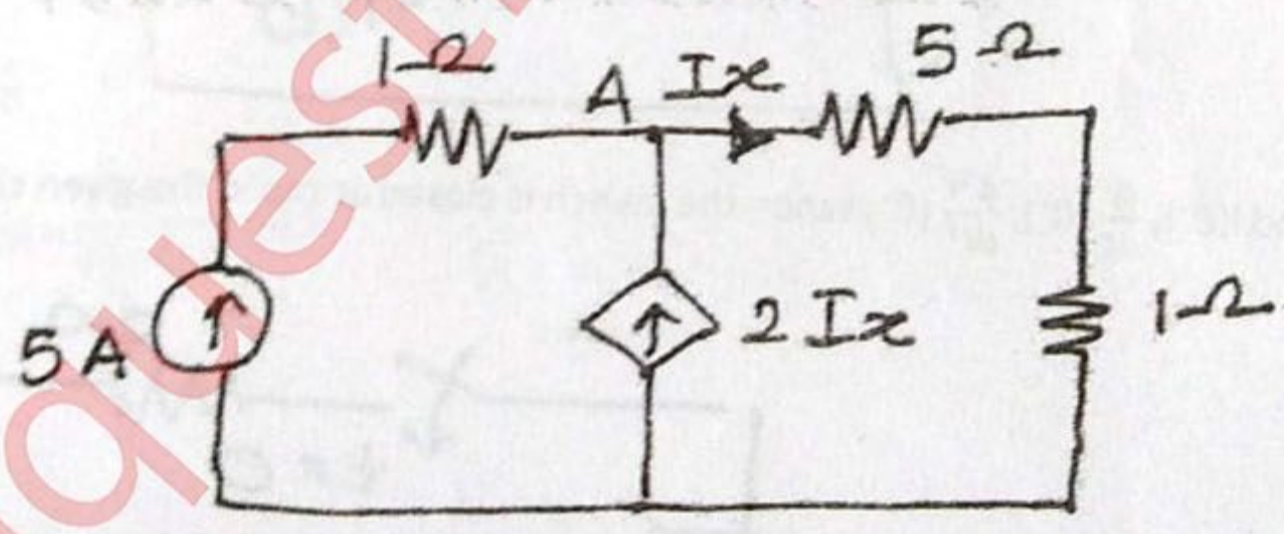
Q.1 a) Determine poles & zeros of following impedance function. (05)

$$Z(s) = \frac{15(s^3 + 2s^2 + 3s + 2)}{s^4 + 6s^3 + 8s^2}$$

b) Draw dual of a given network. (05)



c) Find I_x and V_A . (05)



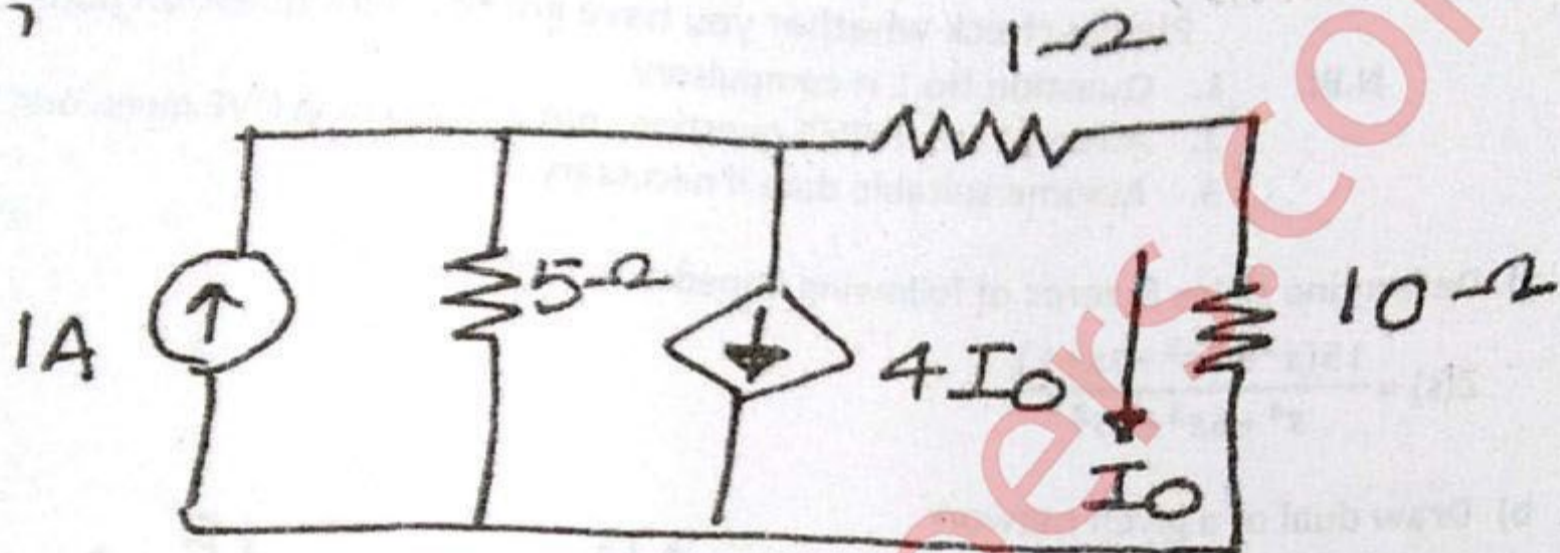
d) Test whether the polynomial $P(s)$ is Hurwitz. $P(s) = s^5 + 3s^3 + 2s$ (05)

Q.2 a) The reduced incidence matrix of an oriented graph is (10)

$$A = \begin{bmatrix} 0 & -1 & 1 & 0 & 0 \\ 0 & 0 & -1 & -1 & -1 \\ -1 & 0 & 0 & 0 & 1 \end{bmatrix}$$

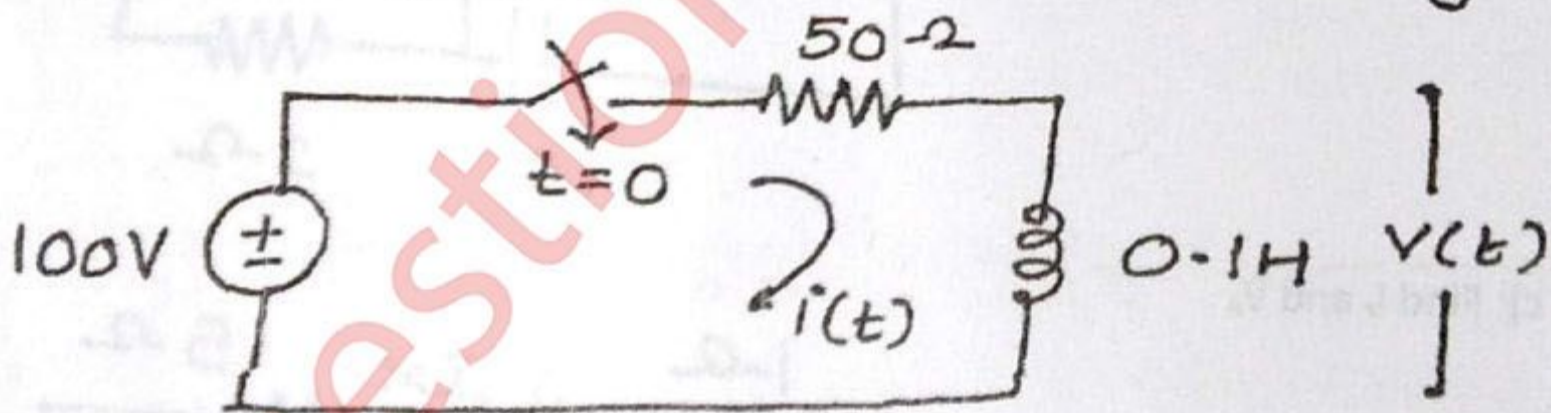
- i) Draw the oriented graph
- ii) Write tie-set matrix
- iii) Write cut-set matrix.

b) Find power loss in the 10Ω resistor in the circuit shown below using Norton's theorem (10)

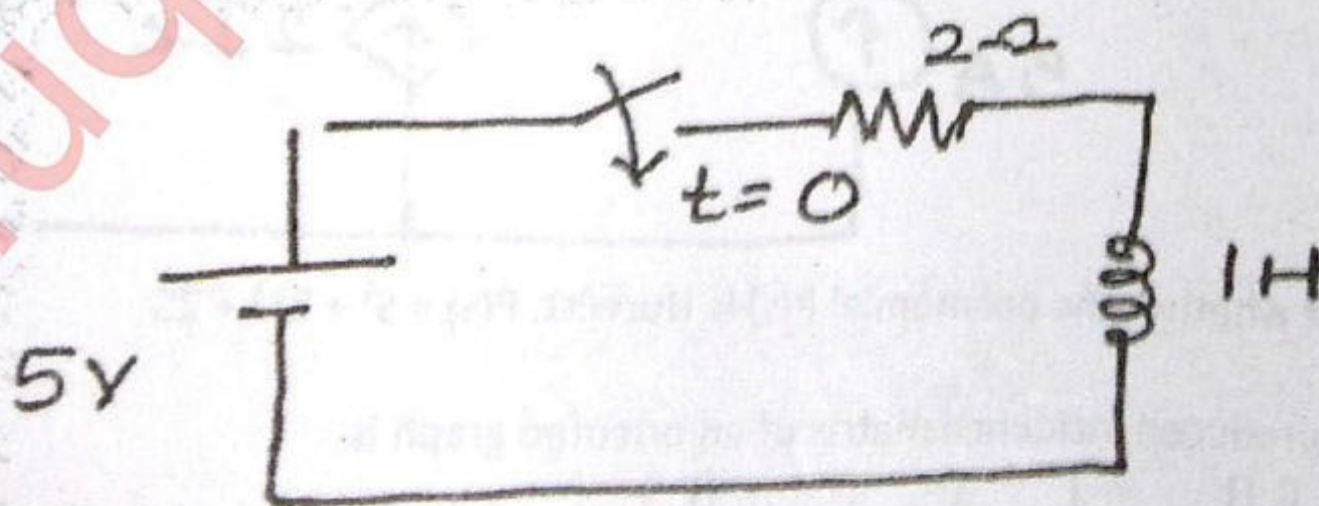


- Q. 3 a) State maximum power transfer theorem and give the proof. (05)
 b) What are the significance of initial conditions? (05)
 c) Explain condition of reciprocity and symmetry for Y - parameters. (10)

Q. 4 a) Find current $i(t)$ and the voltage $V(t)$ (10)

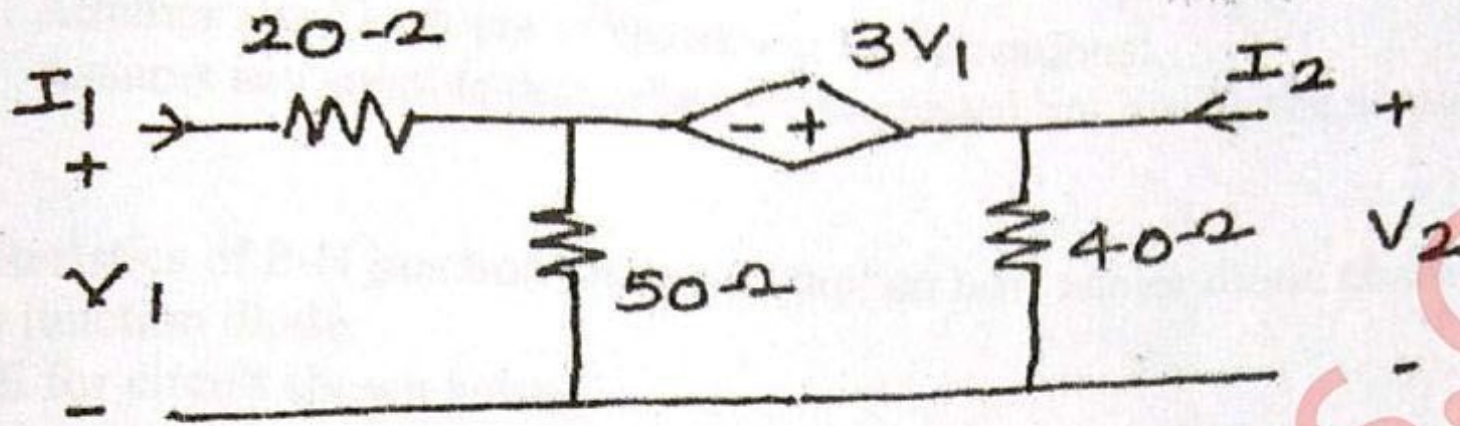


b) Find $i(0^+)$, $\frac{di}{dt}(0^+)$, $\frac{d^2i}{dt^2}(0^+)$ when the switch is closed at $t=0$ in the given circuit. (10)



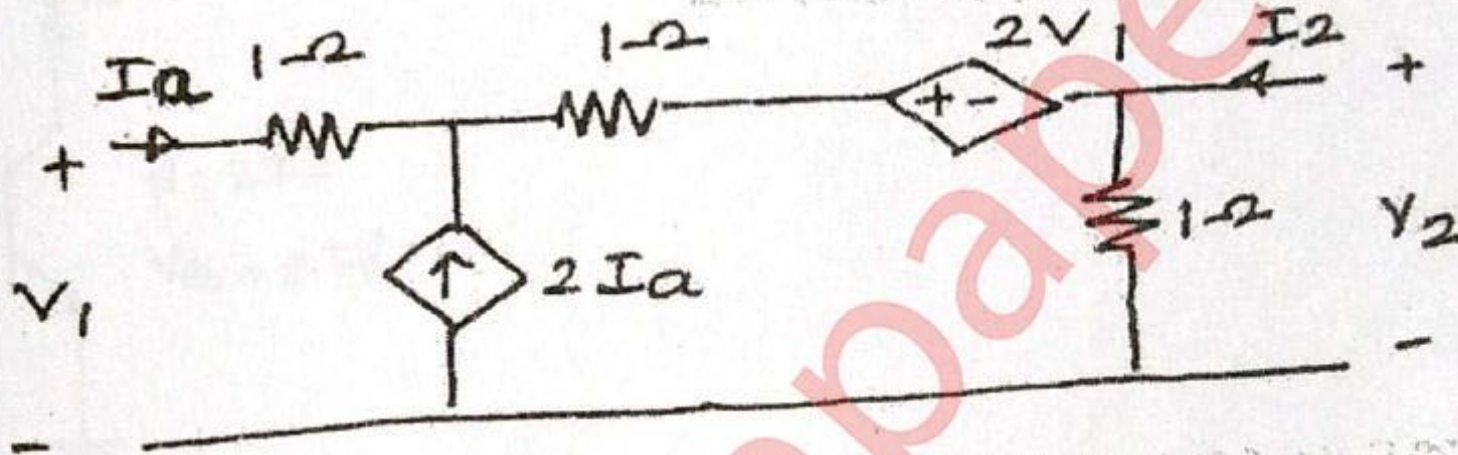
Q.P. Code :24697

Q.5 a) For a given network find Z-parameters.



(10)

b) Find voltage ratio transfer function G_{21} for network shown.



(10)

Q.6 a) Synthesize the given function in Cauer I form.

$$Z(s) = \frac{3(s+2)(s+4)}{s(s+3)}$$

(06)

b) Synthesize following impedance function in Cauer II form

$$Z(s) = \frac{s^3+2s}{s^4+4s^2+3}$$

(06)

c) Test whether $F(s) = \frac{s^3+1}{s^3+4s}$ is p.r.f.

(08)
